

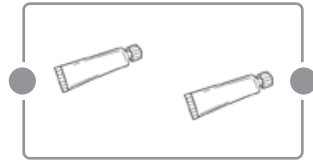
1

OPERACIONES

Nombre: _____ Curso: _____ Fecha: _____

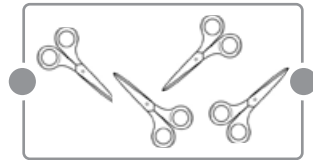
- 1 CUENTA EL NÚMERO DE OBJETOS QUE HAY EN CADA RECUADRO. DESPUÉS, RESUELVE LAS SUMAS Y ÚNELAS CON EL DIBUJO QUE CORRESPONDE.

$3 + 1 = \square \bullet$



$\bullet 1 + 1 = \square$

$1 + 1 = \square \bullet$



$\bullet 2 + 2 = \square$

- 2 SUMA EN HORIZONTAL.

$1 + 1 = 2$

$1 + 4 = \square$

$1 + 7 = \square$

$1 + 2 = \square$

$1 + 5 = \square$

$1 + 8 = \square$

- 3 SUMA EN VERTICAL.

$$\begin{array}{r} 1 \\ + 1 \\ \hline 2 \end{array}$$

$$\begin{array}{r} 1 \\ + 2 \\ \hline \square \end{array}$$

$$\begin{array}{r} 1 \\ + 3 \\ \hline \square \end{array}$$

$$\begin{array}{r} 2 \\ + 1 \\ \hline \square \end{array}$$

$$\begin{array}{r} 2 \\ + 2 \\ \hline \square \end{array}$$

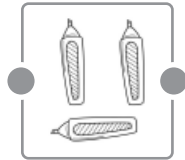
2

OPERACIONES

Nombre: _____ Curso: _____ Fecha: _____

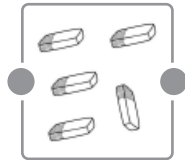
- 1 CUENTA EL NÚMERO DE OBJETOS QUE HAY EN CADA RECUADRO. DESPUÉS, RESUELVE LAS SUMAS Y ÚNELAS CON EL DIBUJO QUE CORRESPONDE.

$2 + 1 = \square$



$3 + 2 = \square$

$4 + 1 = \square$



$1 + 1 + 1 = \square$

- 2 SUMA EN HORIZONTAL.

$2 + 1 = \square$

$2 + 4 = \square$

$2 + 7 = \square$

$2 + 3 = \square$

$2 + 6 = \square$

$2 + 9 = \square$

- 3 SUMA EN VERTICAL.

$$\begin{array}{r} 3 \\ + 4 \\ \hline \square \end{array}$$

$$\begin{array}{r} 5 \\ + 1 \\ \hline \square \end{array}$$

$$\begin{array}{r} 3 \\ + 5 \\ \hline \square \end{array}$$

$$\begin{array}{r} 5 \\ + 1 \\ \hline \square \end{array}$$

$$\begin{array}{r} 4 \\ + 3 \\ \hline \square \end{array}$$

3

OPERACIONES

Nombre: _____ Curso: _____ Fecha: _____

1 SUMA EN HORIZONTAL.

$3 + 1 = \square$

$3 + 4 = \square$

$3 + 7 = \square$

$3 + 2 = \square$

$3 + 5 = \square$

$3 + 8 = \square$

$3 + 3 = \square$

$3 + 6 = \square$

$3 + 9 = \square$

2 SUMA EN VERTICAL.

$$\begin{array}{r} + 5 \\ + 5 \\ \hline \square \end{array}$$

$$\begin{array}{r} + 6 \\ + 2 \\ \hline \square \end{array}$$

$$\begin{array}{r} + 7 \\ + 1 \\ \hline \square \end{array}$$

$$\begin{array}{r} + 6 \\ + 3 \\ \hline \square \end{array}$$

$$\begin{array}{r} + 2 \\ + 7 \\ \hline \square \end{array}$$

$$\begin{array}{r} + 4 \\ + 6 \\ \hline \square \end{array}$$

$$\begin{array}{r} + 6 \\ + 4 \\ \hline \square \end{array}$$

$$\begin{array}{r} + 1 \\ + 8 \\ \hline \square \end{array}$$

$$\begin{array}{r} + 7 \\ + 2 \\ \hline \square \end{array}$$

$$\begin{array}{r} + 2 \\ + 9 \\ \hline \square \end{array}$$

$$\begin{array}{r} + 8 \\ + 1 \\ \hline \square \end{array}$$

$$\begin{array}{r} + 2 \\ + 8 \\ \hline \square \end{array}$$

$$\begin{array}{r} + 7 \\ + 4 \\ \hline \square \end{array}$$

$$\begin{array}{r} + 8 \\ + 3 \\ \hline \square \end{array}$$

$$\begin{array}{r} + 9 \\ + 3 \\ \hline \square \end{array}$$

Nombre: _____ Curso: _____ Fecha: _____

1 SUMA EN HORIZONTAL.

$4 + 1 = \square$

$4 + 4 = \square$

$4 + 7 = \square$

$4 + 2 = \square$

$4 + 5 = \square$

$4 + 8 = \square$

$4 + 3 = \square$

$4 + 6 = \square$

$4 + 9 = \square$

2 SUMA EN VERTICAL.

$$\begin{array}{r} 3 \\ + 7 \\ \hline \square \end{array}$$

$$\begin{array}{r} 5 \\ + 6 \\ \hline \square \end{array}$$

$$\begin{array}{r} 4 \\ + 8 \\ \hline \square \end{array}$$

$$\begin{array}{r} 7 \\ + 6 \\ \hline \square \end{array}$$

$$\begin{array}{r} 1 \\ + 9 \\ \hline \square \end{array}$$

$$\begin{array}{r} 3 \\ + 9 \\ \hline \square \end{array}$$

$$\begin{array}{r} 6 \\ + 6 \\ \hline \square \end{array}$$

$$\begin{array}{r} 7 \\ + 4 \\ \hline \square \end{array}$$

$$\begin{array}{r} 9 \\ + 6 \\ \hline \square \end{array}$$

$$\begin{array}{r} 5 \\ + 8 \\ \hline \square \end{array}$$

$$\begin{array}{r} 3 \\ + 8 \\ \hline \square \end{array}$$

$$\begin{array}{r} 8 \\ + 7 \\ \hline \square \end{array}$$

$$\begin{array}{r} 6 \\ + 5 \\ \hline \square \end{array}$$

$$\begin{array}{r} 9 \\ + 1 \\ \hline \square \end{array}$$

$$\begin{array}{r} 5 \\ + 7 \\ \hline \square \end{array}$$

Nombre: _____ Curso: _____ Fecha: _____

1 SUMA EN HORIZONTAL.

$10 + 20 = \square$

$70 + 10 = \square$

$20 + 30 = \square$

$20 + 50 = \square$

$10 + 40 = \square$

$40 + 30 = \square$

2 SUMA EN VERTICAL.

$$\begin{array}{r} 26 \\ + 3 \\ \hline \square \end{array}$$

$$\begin{array}{r} 18 \\ + 1 \\ \hline \square \end{array}$$

$$\begin{array}{r} 22 \\ + 5 \\ \hline \square \end{array}$$

$$\begin{array}{r} 12 \\ + 6 \\ \hline \square \end{array}$$

$$\begin{array}{r} 17 \\ + 2 \\ \hline \square \end{array}$$

$$\begin{array}{r} 24 \\ + 5 \\ \hline \square \end{array}$$

$$\begin{array}{r} 15 \\ + 4 \\ \hline \square \end{array}$$

$$\begin{array}{r} 21 \\ + 8 \\ \hline \square \end{array}$$

$$\begin{array}{r} 27 \\ + 21 \\ \hline \square \end{array}$$

$$\begin{array}{r} 15 \\ + 4 \\ \hline \square \end{array}$$

$$\begin{array}{r} 14 \\ + 3 \\ \hline \square \end{array}$$

$$\begin{array}{r} 25 \\ + 4 \\ \hline \square \end{array}$$

$$\begin{array}{r} 11 \\ + 8 \\ \hline \square \end{array}$$

$$\begin{array}{r} 16 \\ + 3 \\ \hline \square \end{array}$$

$$\begin{array}{r} 20 \\ + 8 \\ \hline \square \end{array}$$

6

OPERACIONES

Nombre: _____ Curso: _____ Fecha: _____

1 SUMA EN VERTICAL.

$$\begin{array}{r} 36 \\ + 3 \\ \hline \square \end{array}$$

$$\begin{array}{r} 54 \\ + 4 \\ \hline \square \end{array}$$

$$\begin{array}{r} 41 \\ + 8 \\ \hline \square \end{array}$$

$$\begin{array}{r} 37 \\ + 2 \\ \hline \square \end{array}$$

$$\begin{array}{r} 45 \\ + 4 \\ \hline \square \end{array}$$

$$\begin{array}{r} 45 \\ + 3 \\ \hline \square \end{array}$$

$$\begin{array}{r} 32 \\ + 5 \\ \hline \square \end{array}$$

$$\begin{array}{r} 51 \\ + 8 \\ \hline \square \end{array}$$

$$\begin{array}{r} 56 \\ + 3 \\ \hline \square \end{array}$$

$$\begin{array}{r} 50 \\ + 9 \\ \hline \square \end{array}$$

2 COLOREA EL RESULTADO DE CADA SUMA.

$60 + 7$

→ Rojo

$81 + 5$

→ Amarillo

$71 + 8$

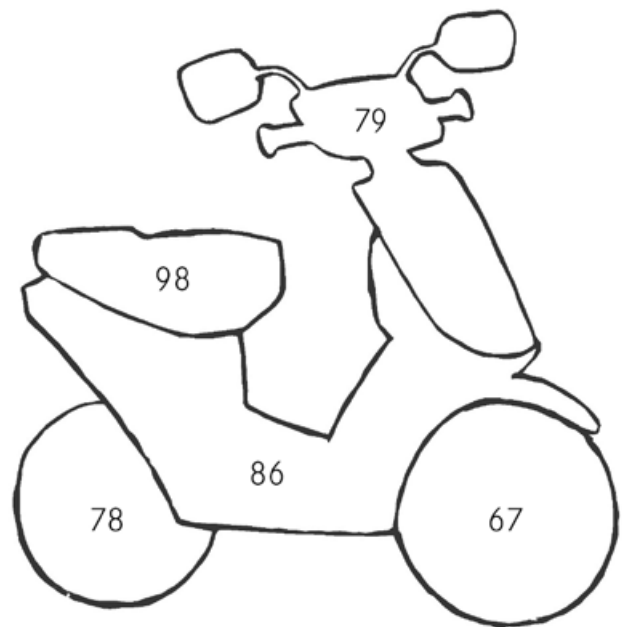
→ Azul

$92 + 6$

→ Verde

$74 + 4$

→ Violeta



Nombre: _____ Curso: _____ Fecha: _____

1 SUMA EN HORIZONTAL.

$20 + 2 = \square$ $70 + 4 = \square$ $60 + 7 = \square$

$30 + 5 = \square$ $50 + 7 = \square$ $80 + 3 = \square$

$40 + 9 = \square$ $30 + 8 = \square$ $90 + 5 = \square$

2 SUMA EN VERTICAL.

$$\begin{array}{r} 64 \\ + 4 \\ \hline \square \end{array}$$

$$\begin{array}{r} 73 \\ + 3 \\ \hline \square \end{array}$$

$$\begin{array}{r} 95 \\ + 3 \\ \hline \square \end{array}$$

$$\begin{array}{r} 82 \\ + 6 \\ \hline \square \end{array}$$

$$\begin{array}{r} 96 \\ + 2 \\ \hline \square \end{array}$$

$$\begin{array}{r} 72 \\ + 7 \\ \hline \square \end{array}$$

$$\begin{array}{r} 85 \\ + 3 \\ \hline \square \end{array}$$

$$\begin{array}{r} 91 \\ + 7 \\ \hline \square \end{array}$$

$$\begin{array}{r} 75 \\ + 2 \\ \hline \square \end{array}$$

$$\begin{array}{r} 84 \\ + 4 \\ \hline \square \end{array}$$

$$\begin{array}{r} 82 \\ + 7 \\ \hline \square \end{array}$$

$$\begin{array}{r} 74 \\ + 4 \\ \hline \square \end{array}$$

$$\begin{array}{r} 61 \\ + 8 \\ \hline \square \end{array}$$

$$\begin{array}{r} 66 \\ + 2 \\ \hline \square \end{array}$$

$$\begin{array}{r} 90 \\ + 9 \\ \hline \square \end{array}$$

Nombre: _____ Curso: _____ Fecha: _____

1 SUMA EN HORIZONTAL.

$32 + 7 = \square$ $41 + 7 = \square$ $51 + 4 = \square$

$35 + 2 = \square$ $42 + 6 = \square$ $53 + 5 = \square$

$31 + 8 = \square$ $43 + 4 = \square$ $57 + 2 = \square$

2 REALIZA LAS SUMAS.

$$\begin{array}{r} + 12 \\ + 11 \\ \hline 23 \end{array}$$

$$\begin{array}{r} + 11 \\ + 12 \\ \hline \square \end{array}$$

$$\begin{array}{r} + 12 \\ + 32 \\ \hline \square \end{array}$$

$$\begin{array}{r} + 31 \\ + 20 \\ \hline \square \end{array}$$

$$\begin{array}{r} + 21 \\ + 13 \\ \hline \square \end{array}$$

$$\begin{array}{r} + 23 \\ + 32 \\ \hline \square \end{array}$$

$$\begin{array}{r} + 13 \\ + 21 \\ \hline \square \end{array}$$

$$\begin{array}{r} + 31 \\ + 11 \\ \hline \square \end{array}$$

$$\begin{array}{r} + 10 \\ + 41 \\ \hline \square \end{array}$$

$$\begin{array}{r} + 12 \\ + 43 \\ \hline \square \end{array}$$

$$\begin{array}{r} + 21 \\ + 21 \\ \hline \square \end{array}$$

$$\begin{array}{r} + 40 \\ + 11 \\ \hline \square \end{array}$$

$$\begin{array}{r} + 34 \\ + 31 \\ \hline \square \end{array}$$

$$\begin{array}{r} + 40 \\ + 22 \\ \hline \square \end{array}$$

$$\begin{array}{r} + 12 \\ + 54 \\ \hline \square \end{array}$$

Nombre: _____ Curso: _____ Fecha: _____

1 RESTA EN HORIZONTAL.

$1 - 1 = 0$

$4 - 1 = \square$

$7 - 1 = \square$

$2 - 1 = \square$

$5 - 1 = \square$

$8 - 1 = \square$

$3 - 1 = \square$

$6 - 1 = \square$

$9 - 1 = \square$

2 RESTA EN VERTICAL.

$$\begin{array}{r} 2 \\ - 1 \\ \hline 1 \end{array}$$

$$\begin{array}{r} 3 \\ - 1 \\ \hline \square \end{array}$$

$$\begin{array}{r} 3 \\ - 2 \\ \hline \square \end{array}$$

$$\begin{array}{r} 4 \\ - 2 \\ \hline \square \end{array}$$

$$\begin{array}{r} 4 \\ - 3 \\ \hline \square \end{array}$$

$$\begin{array}{r} 5 \\ - 3 \\ \hline \square \end{array}$$

$$\begin{array}{r} 4 \\ - 1 \\ \hline \square \end{array}$$

$$\begin{array}{r} 5 \\ - 4 \\ \hline \square \end{array}$$

$$\begin{array}{r} 5 \\ - 1 \\ \hline \square \end{array}$$

$$\begin{array}{r} 6 \\ - 5 \\ \hline \square \end{array}$$

$$\begin{array}{r} 6 \\ - 1 \\ \hline \square \end{array}$$

$$\begin{array}{r} 5 \\ - 2 \\ \hline \square \end{array}$$

$$\begin{array}{r} 6 \\ - 4 \\ \hline \square \end{array}$$

$$\begin{array}{r} 7 \\ - 4 \\ \hline \square \end{array}$$

$$\begin{array}{r} 6 \\ - 2 \\ \hline \square \end{array}$$

10 OPERACIONES

Nombre: _____ Curso: _____ Fecha: _____

1 RESTA EN HORIZONTAL.

$2 - 2 = \square$

$5 - 2 = \square$

$8 - 2 = \square$

$3 - 2 = \square$

$6 - 2 = \square$

$9 - 2 = \square$

$4 - 2 = \square$

$7 - 2 = \square$

$10 - 2 = \square$

2 RESTA EN VERTICAL.

$$\begin{array}{r} 7 \\ - 2 \\ \hline \square \end{array}$$

$$\begin{array}{r} 8 \\ - 1 \\ \hline \square \end{array}$$

$$\begin{array}{r} 6 \\ - 6 \\ \hline \square \end{array}$$

$$\begin{array}{r} 7 \\ - 5 \\ \hline \square \end{array}$$

$$\begin{array}{r} 8 \\ - 7 \\ \hline \square \end{array}$$

$$\begin{array}{r} 7 \\ - 6 \\ \hline \square \end{array}$$

$$\begin{array}{r} 8 \\ - 2 \\ \hline \square \end{array}$$

$$\begin{array}{r} 7 \\ - 3 \\ \hline \square \end{array}$$

$$\begin{array}{r} 2 \\ - 2 \\ \hline \square \end{array}$$

$$\begin{array}{r} 9 \\ - 1 \\ \hline \square \end{array}$$

$$\begin{array}{r} 8 \\ - 3 \\ \hline \square \end{array}$$

$$\begin{array}{r} 4 \\ - 4 \\ \hline \square \end{array}$$

$$\begin{array}{r} 6 \\ - 3 \\ \hline \square \end{array}$$

$$\begin{array}{r} 7 \\ - 1 \\ \hline \square \end{array}$$

$$\begin{array}{r} 9 \\ - 4 \\ \hline \square \end{array}$$

11 OPERACIONES

Nombre: _____ Curso: _____ Fecha: _____

1 RESTA EN HORIZONTAL.

$2 - 2 = \square$

$5 - 1 = \square$

$8 - 1 = \square$

$3 - 2 = \square$

$6 - 1 = \square$

$9 - 1 = \square$

$4 - 2 = \square$

$7 - 1 = \square$

$10 - 1 = \square$

2 RESTA EN VERTICAL.

$$\begin{array}{r} 7 \\ - 7 \\ \hline \square \end{array}$$

$$\begin{array}{r} 9 \\ - 8 \\ \hline \square \end{array}$$

$$\begin{array}{r} 8 \\ - 6 \\ \hline \square \end{array}$$

$$\begin{array}{r} 9 \\ - 9 \\ \hline \square \end{array}$$

$$\begin{array}{r} 9 \\ - 7 \\ \hline \square \end{array}$$

$$\begin{array}{r} 8 \\ - 4 \\ \hline \square \end{array}$$

$$\begin{array}{r} 9 \\ - 2 \\ \hline \square \end{array}$$

$$\begin{array}{r} 8 \\ - 5 \\ \hline \square \end{array}$$

$$\begin{array}{r} 9 \\ - 5 \\ \hline \square \end{array}$$

$$\begin{array}{r} 6 \\ - 0 \\ \hline \square \end{array}$$

$$\begin{array}{r} 3 \\ - 0 \\ \hline \square \end{array}$$

$$\begin{array}{r} 10 \\ - 1 \\ \hline \square \end{array}$$

$$\begin{array}{r} 4 \\ - 1 \\ \hline \square \end{array}$$

$$\begin{array}{r} 10 \\ - 3 \\ \hline \square \end{array}$$

$$\begin{array}{r} 11 \\ - 3 \\ \hline \square \end{array}$$

12 OPERACIONES

Nombre: _____ Curso: _____ Fecha: _____

1 RESTA EN HORIZONTAL.

$7 - 2 = \square$

$9 - 2 = \square$

$9 - 1 = \square$

$5 - 3 = \square$

$6 - 1 = \square$

$6 - 2 = \square$

$8 - 3 = \square$

$7 - 3 = \square$

$9 - 8 = \square$

2 RESTA EN VERTICAL.

$$\begin{array}{r} 8 \\ - 3 \\ \hline \square \end{array}$$

$$\begin{array}{r} 9 \\ - 5 \\ \hline \square \end{array}$$

$$\begin{array}{r} 7 \\ - 7 \\ \hline \square \end{array}$$

$$\begin{array}{r} 9 \\ - 6 \\ \hline \square \end{array}$$

$$\begin{array}{r} 8 \\ - 6 \\ \hline \square \end{array}$$

$$\begin{array}{r} 9 \\ - 9 \\ \hline \square \end{array}$$

$$\begin{array}{r} 7 \\ - 5 \\ \hline \square \end{array}$$

$$\begin{array}{r} 9 \\ - 7 \\ \hline \square \end{array}$$

$$\begin{array}{r} 8 \\ - 2 \\ \hline \square \end{array}$$

$$\begin{array}{r} 6 \\ - 6 \\ \hline \square \end{array}$$

$$\begin{array}{r} 7 \\ - 4 \\ \hline \square \end{array}$$

$$\begin{array}{r} 9 \\ - 4 \\ \hline \square \end{array}$$

$$\begin{array}{r} 7 \\ - 6 \\ \hline \square \end{array}$$

$$\begin{array}{r} 8 \\ - 4 \\ \hline \square \end{array}$$

$$\begin{array}{r} 9 \\ - 2 \\ \hline \square \end{array}$$

13 OPERACIONES

Nombre: _____ Curso: _____ Fecha: _____

1 RESTA EN HORIZONTAL.

$5 - 5 = \square$

$8 - 5 = \square$

$11 - 5 = \square$

$6 - 5 = \square$

$9 - 5 = \square$

$12 - 5 = \square$

$7 - 5 = \square$

$10 - 5 = \square$

$13 - 5 = \square$

2 RESTA EN VERTICAL.

$$\begin{array}{r} 8 \\ - 5 \\ \hline \square \end{array}$$

$$\begin{array}{r} 7 \\ - 6 \\ \hline \square \end{array}$$

$$\begin{array}{r} 9 \\ - 5 \\ \hline \square \end{array}$$

$$\begin{array}{r} 6 \\ - 3 \\ \hline \square \end{array}$$

$$\begin{array}{r} 7 \\ - 5 \\ \hline \square \end{array}$$

$$\begin{array}{r} 12 \\ - 6 \\ \hline \square \end{array}$$

$$\begin{array}{r} 9 \\ - 0 \\ \hline \square \end{array}$$

$$\begin{array}{r} 11 \\ - 5 \\ \hline \square \end{array}$$

$$\begin{array}{r} 12 \\ - 4 \\ \hline \square \end{array}$$

$$\begin{array}{r} 11 \\ - 4 \\ \hline \square \end{array}$$

$$\begin{array}{r} 10 \\ - 5 \\ \hline \square \end{array}$$

$$\begin{array}{r} 11 \\ - 9 \\ \hline \square \end{array}$$

$$\begin{array}{r} 10 \\ - 1 \\ \hline \square \end{array}$$

$$\begin{array}{r} 12 \\ - 2 \\ \hline \square \end{array}$$

$$\begin{array}{r} 10 \\ - 7 \\ \hline \square \end{array}$$

14 OPERACIONES

Nombre: _____ Curso: _____ Fecha: _____

1 RESTA EN HORIZONTAL.

$6 - 6 = \square$ $9 - 6 = \square$ $12 - 6 = \square$

$7 - 6 = \square$ $10 - 6 = \square$ $13 - 6 = \square$

$8 - 6 = \square$ $11 - 6 = \square$ $14 - 6 = \square$

2 RESTA EN VERTICAL.

$$\begin{array}{r} 13 \\ - 8 \\ \hline \square \end{array}$$

$$\begin{array}{r} 12 \\ - 3 \\ \hline \square \end{array}$$

$$\begin{array}{r} 14 \\ - 8 \\ \hline \square \end{array}$$

$$\begin{array}{r} 13 \\ - 5 \\ \hline \square \end{array}$$

$$\begin{array}{r} 10 \\ - 9 \\ \hline \square \end{array}$$

$$\begin{array}{r} 6 \\ - 0 \\ \hline \square \end{array}$$

$$\begin{array}{r} 13 \\ - 7 \\ \hline \square \end{array}$$

$$\begin{array}{r} 13 \\ - 9 \\ \hline \square \end{array}$$

$$\begin{array}{r} 14 \\ - 9 \\ \hline \square \end{array}$$

$$\begin{array}{r} 7 \\ - 1 \\ \hline \square \end{array}$$

$$\begin{array}{r} 6 \\ - 2 \\ \hline \square \end{array}$$

$$\begin{array}{r} 8 \\ - 3 \\ \hline \square \end{array}$$

$$\begin{array}{r} 12 \\ - 2 \\ \hline \square \end{array}$$

$$\begin{array}{r} 14 \\ - 5 \\ \hline \square \end{array}$$

$$\begin{array}{r} 9 \\ - 2 \\ \hline \square \end{array}$$

15 OPERACIONES

Nombre: _____ Curso: _____ Fecha: _____

1 RESTA EN HORIZONTAL.

$7 - 7 = \square$ $10 - 7 = \square$ $13 - 7 = \square$

$8 - 7 = \square$ $11 - 7 = \square$ $14 - 7 = \square$

$9 - 7 = \square$ $12 - 7 = \square$ $15 - 7 = \square$

2 RESTA EN VERTICAL.

$$\begin{array}{r} 8 \\ - 7 \\ \hline \square \end{array}$$

$$\begin{array}{r} 6 \\ - 6 \\ \hline \square \end{array}$$

$$\begin{array}{r} 7 \\ - 4 \\ \hline \square \end{array}$$

$$\begin{array}{r} 9 \\ - 5 \\ \hline \square \end{array}$$

$$\begin{array}{r} 8 \\ - 6 \\ \hline \square \end{array}$$

$$\begin{array}{r} 15 \\ - 7 \\ \hline \square \end{array}$$

$$\begin{array}{r} 9 \\ - 4 \\ \hline \square \end{array}$$

$$\begin{array}{r} 13 \\ - 6 \\ \hline \square \end{array}$$

$$\begin{array}{r} 15 \\ - 6 \\ \hline \square \end{array}$$

$$\begin{array}{r} 15 \\ - 9 \\ \hline \square \end{array}$$

$$\begin{array}{r} 7 \\ - 6 \\ \hline \square \end{array}$$

$$\begin{array}{r} 8 \\ - 5 \\ \hline \square \end{array}$$

$$\begin{array}{r} 9 \\ - 8 \\ \hline \square \end{array}$$

$$\begin{array}{r} 15 \\ - 8 \\ \hline \square \end{array}$$

$$\begin{array}{r} 15 \\ - 9 \\ \hline \square \end{array}$$

16 OPERACIONES

Nombre: _____ Curso: _____ Fecha: _____

1 RESTA EN HORIZONTAL.

$8 - 8 = \square$

$11 - 8 = \square$

$14 - 8 = \square$

$9 - 8 = \square$

$12 - 8 = \square$

$15 - 8 = \square$

$10 - 8 = \square$

$13 - 8 = \square$

$16 - 8 = \square$

2 RESTA EN VERTICAL.

$$\begin{array}{r} 9 \\ - 3 \\ \hline \square \end{array}$$

$$\begin{array}{r} 9 \\ - 6 \\ \hline \square \end{array}$$

$$\begin{array}{r} 3 \\ - 3 \\ \hline \square \end{array}$$

$$\begin{array}{r} 4 \\ - 0 \\ \hline \square \end{array}$$

$$\begin{array}{r} 8 \\ - 3 \\ \hline \square \end{array}$$

$$\begin{array}{r} 14 \\ - 6 \\ \hline \square \end{array}$$

$$\begin{array}{r} 8 \\ - 4 \\ \hline \square \end{array}$$

$$\begin{array}{r} 7 \\ - 0 \\ \hline \square \end{array}$$

$$\begin{array}{r} 15 \\ - 5 \\ \hline \square \end{array}$$

$$\begin{array}{r} 16 \\ - 8 \\ \hline \square \end{array}$$

$$\begin{array}{r} 16 \\ - 6 \\ \hline \square \end{array}$$

$$\begin{array}{r} 16 \\ - 9 \\ \hline \square \end{array}$$

$$\begin{array}{r} 8 \\ - 2 \\ \hline \square \end{array}$$

$$\begin{array}{r} 16 \\ - 7 \\ \hline \square \end{array}$$

$$\begin{array}{r} 8 \\ - 8 \\ \hline \square \end{array}$$

Nombre: _____ Curso: _____ Fecha: _____

1 COMPLETA.

$40 + 10 = \square$

$80 + 10 = \square$

$50 + 10 = \square$

$70 + 10 = \square$

$30 - 10 = \square$

$70 - 10 = \square$

$50 - 10 = \square$

$20 - 10 = \square$

$73 + 10 = \square$

$21 + 10 = \square$

$48 + 10 = \square$

$77 + 10 = \square$

$49 - 10 = \square$

$23 - 10 = \square$

$76 - 10 = \square$

$95 - 10 = \square$

18 OPERACIONES

Nombre: _____ Curso: _____ Fecha: _____

1 COMPLETA.

$12 + 10 = \square$

$18 + 10 = \square$

$22 + 10 = \square$

$24 + 10 = \square$

$14 - 10 = \square$

$23 - 10 = \square$

$27 - 10 = \square$

$29 - 10 = \square$

$24 + 3 = \square$

$65 + 4 = \square$

$31 + 8 = \square$

$73 + 6 = \square$

$78 - 6 = \square$

$59 - 4 = \square$

$38 - 8 = \square$

$66 - 3 = \square$

19 OPERACIONES

Nombre: _____ Curso: _____ Fecha: _____

1 COMPLETA.

$40 + 30 = \square$

$20 + 60 = \square$

$30 + 30 = \square$

$60 + 70 = \square$

$80 - 60 = \square$

$90 - 60 = \square$

$50 - 10 = \square$

$70 - 50 = \square$

$37 + 10 = \square$

$26 + 10 = \square$

$38 + 10 = \square$

$11 + 10 = \square$

$21 - 10 = \square$

$11 - 10 = \square$

$32 - 10 = \square$

$39 - 10 = \square$

Nombre: _____ Curso: _____ Fecha: _____

1 COMPLETA.

$23 + 70 = \square$

$56 + 20 = \square$

$45 + 30 = \square$

$79 + 30 = \square$

$95 - 40 = \square$

$64 - 50 = \square$

$45 - 30 = \square$

$87 - 20 = \square$

$40 + 10 = \square$

$50 + 10 = \square$

$20 + 10 = \square$

$10 + 10 = \square$

$20 - 10 = \square$

$40 - 10 = \square$

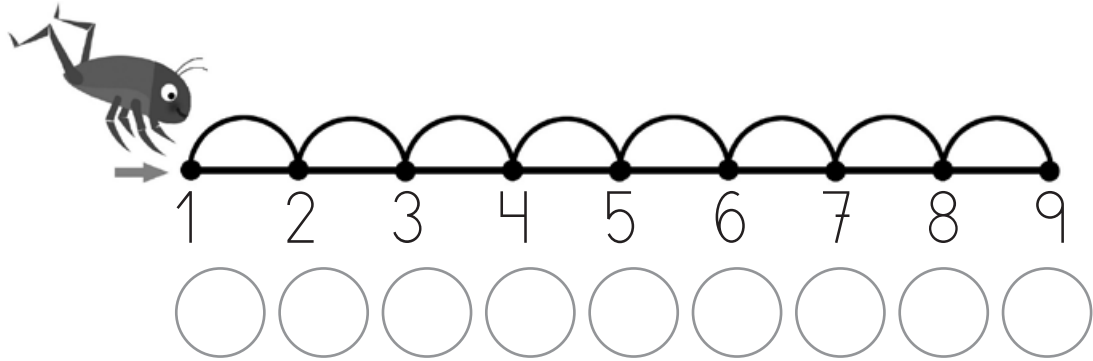
$50 - 10 = \square$

$60 - 10 = \square$

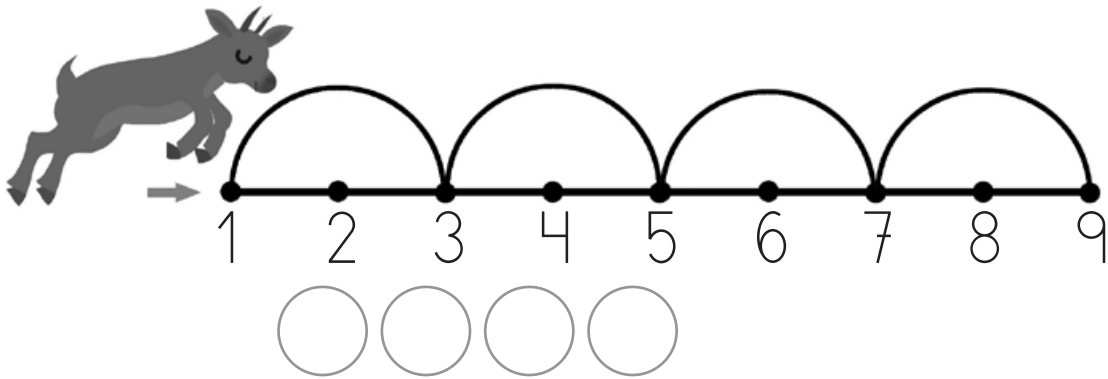
21 OPERACIONES

Nombre: _____ Curso: _____ Fecha: _____

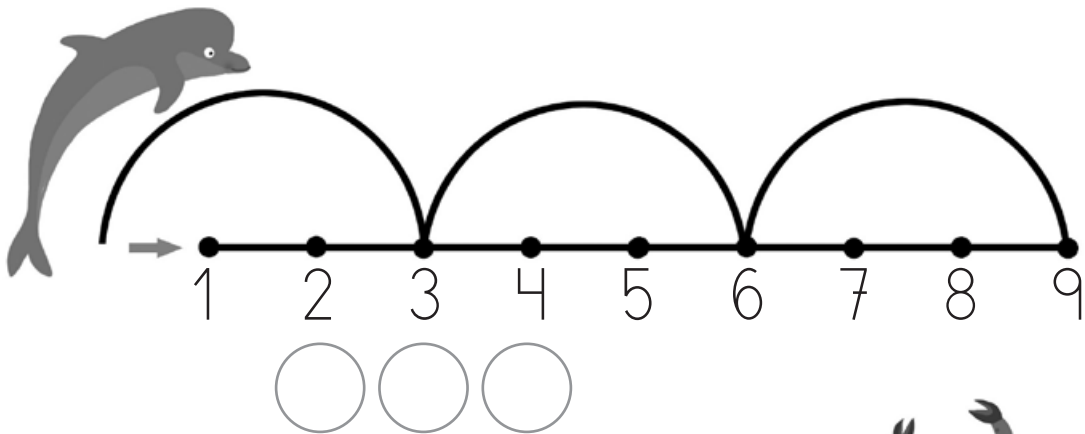
- 1 ESCRIBE EN LOS CÍRCULOS EL NÚMERO EN EL QUE SE DETIENE CADA ANIMAL EN CADA SALTO QUE DA. ¡CUIDADO, EL CANGREJO ANDA PARA ATRÁS!



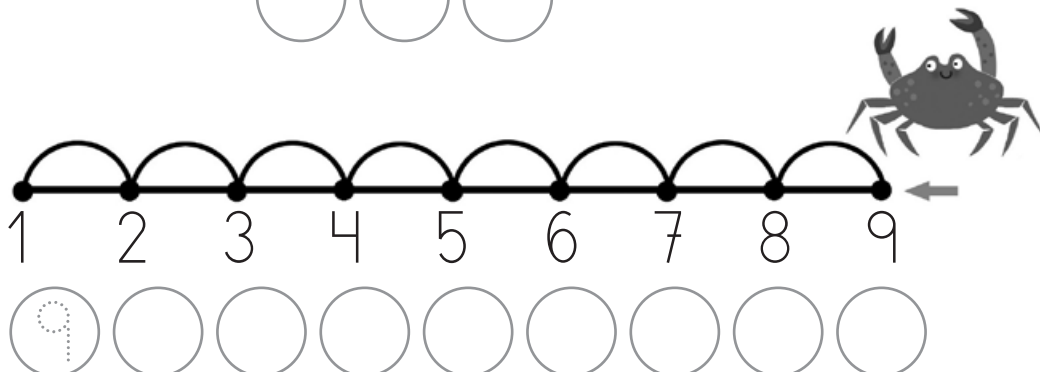
A number line from 1 to 9 with an ant jumping from 1 to 9. Below the line are nine empty circles for the answer.



A number line from 1 to 9 with a goat jumping from 1 to 9. Below the line are four empty circles for the answer.



A number line from 1 to 9 with a dolphin jumping from 1 to 9. Below the line are three empty circles for the answer.



A number line from 1 to 9 with a crab moving from 9 to 1. Below the line are nine empty circles for the answer, with the first circle containing a dotted '9'.

22 OPERACIONES

Nombre: _____ Curso: _____ Fecha: _____

1 SIGUE LA SERIE DE NÚMEROS Y VENTANAS.



2 OBSERVA LOS NÚMEROS Y COMPLETA LA SERIE.

1	2		4			7			10
11		13		15		17		19	20

23 OPERACIONES

Nombre: _____ Curso: _____ Fecha: _____

1 CONTINÚA LAS SERIES.

$$\boxed{1} \xrightarrow{+1} \boxed{} \xrightarrow{+1} \boxed{} \xrightarrow{+2} \boxed{} \xrightarrow{+2} \boxed{} \xrightarrow{+3} \boxed{}$$

$$\boxed{2} \xrightarrow{+2} \boxed{} \xrightarrow{+1} \boxed{} \xrightarrow{+2} \boxed{} \xrightarrow{+2} \boxed{} \xrightarrow{+1} \boxed{}$$

$$\boxed{1} \xrightarrow{+2} \boxed{} \xrightarrow{+2} \boxed{} \xrightarrow{+2} \boxed{} \xrightarrow{+2} \boxed{} \xrightarrow{+2} \boxed{}$$

2 COMPLETA LAS SERIES.

$$\boxed{2} \rightarrow \boxed{4} \rightarrow \boxed{} \rightarrow \boxed{} \rightarrow \boxed{} \rightarrow \boxed{} \rightarrow \boxed{14}$$

$$\boxed{1} \rightarrow \boxed{4} \rightarrow \boxed{} \rightarrow \boxed{10} \rightarrow \boxed{} \rightarrow \boxed{} \rightarrow \boxed{19}$$

$$\boxed{16} \rightarrow \boxed{18} \rightarrow \boxed{} \rightarrow \boxed{} \rightarrow \boxed{} \rightarrow \boxed{} \rightarrow \boxed{28}$$

24 OPERACIONES

Nombre: _____ Curso: _____ Fecha: _____

1 COMPLETA LA SERIE.

$$\boxed{10} \rightarrow \boxed{20} \rightarrow \boxed{} \rightarrow \boxed{} \rightarrow \boxed{} \rightarrow \boxed{} \rightarrow \boxed{70}$$

2 CONTINÚA LAS SERIES.

$$\boxed{9} \xrightarrow{+5} \boxed{} \xrightarrow{+5} \boxed{} \xrightarrow{+5} \boxed{} \xrightarrow{+5} \boxed{} \xrightarrow{+5} \boxed{}$$

$$\boxed{8} \xrightarrow{+9} \boxed{} \xrightarrow{+9} \boxed{} \xrightarrow{+9} \boxed{} \xrightarrow{+9} \boxed{} \xrightarrow{+9} \boxed{}$$

$$\boxed{15} \rightarrow \boxed{22} \rightarrow \boxed{29} \rightarrow \boxed{} \rightarrow \boxed{} \rightarrow \boxed{}$$

$$\boxed{25} \rightarrow \boxed{33} \rightarrow \boxed{41} \rightarrow \boxed{} \rightarrow \boxed{} \rightarrow \boxed{}$$